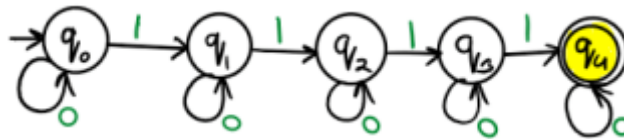


RGPV 2008

Prob 01: Design a FA which accepts set of strings containing four 1's in every string over alphabet $\Sigma = \{0, 1\}$.

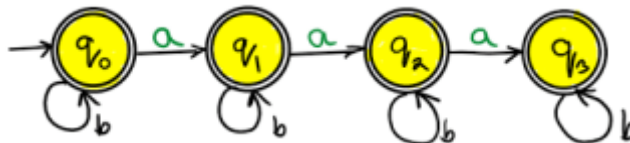
Ans. Some example strings = $\{1111, 0110101, 001100110\}$



RGPV 2016

Prob 02. Design NFA that accepts all strings with at most 3 a's.

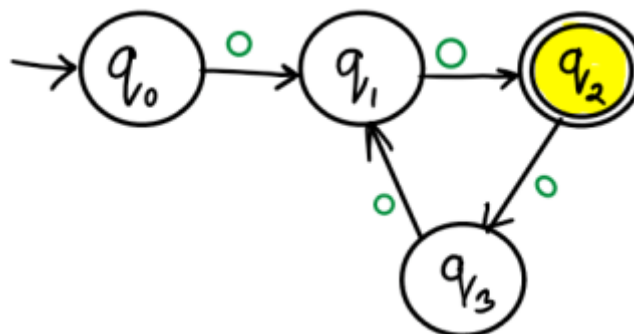
Ans. Some example strings = $\{aaa, baba, a, ab\}$



RGPV 2014

Prob 03: Construct a finite automata for the language $\{0^n \mid n \bmod 3 = 2, n \geq 0\}$

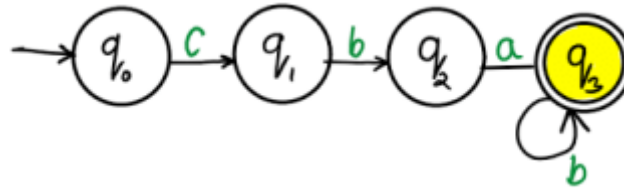
Ans. Some example strings = $\{00, 00000, 00000000\}$



RGPV 2016

Design a NFA for $\{cbab^n \mid n \geq 0\}$

Ans. Some example strings = $\{cba, cbab, cbabb, cbabbb\}$



Related Posts:

1. RGPV TOC What do you understand by DFA how to represent it
2. RGPV short note on automata
3. RGPV TOC properties of transition functions
4. RGPV TOC What is Trap state
5. CFL are not closed under intersection
6. DFA end with 1 contain 00 | RGPV TOC draw
7. NFA to DFA | RGPV TOC
8. Moore to Mealy | RGPV TOC PYQ
9. DFA accept even 0 and even 1 | RGPV TOC PYQ
10. Short note on automata | RGPV TOC PYQ
11. DFA ending with 00 start with 0 no epsilon | RGPV TOC PYQ
12. DFA ending with 101 | RGPV TOC PYQ
13. Construct DFA for a power n , $n \geq 0$ || RGPV TOC
14. Construct FA divisible by 3 | RGPV TOC PYQ
15. Construct DFA equivalent to NFA | RGPV TOC PYQ
16. RGPV Define Mealy and Moore Machine
17. RGPV TOC Short note on equivalent of DFA and NFA

18. RGPV notes Write short note on NDFA
19. CNF from $S \rightarrow aAD; A \rightarrow aB/bAB; B \rightarrow b, D \rightarrow d$.
20. NDFA accepting two consecutive a's or two consecutive b's.
21. Regular expression to CFG
22. Regular expression to Regular grammar
23. Grammar is ambiguous. $S \rightarrow aSbS|bSaS|\epsilon$
24. leftmost and rightmost derivations
25. Construct Moore machine for Mealy machine